
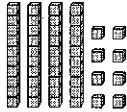




Use the block on the left to find the value of the set of blocks on the right.


Answers

1)

 $= 1$ 


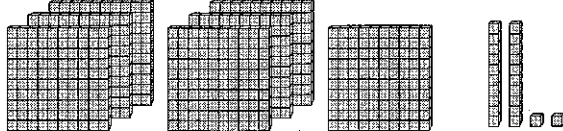
1. _____

2)

 $= 1$ 



2. _____

3)

 $= 1$ 



3. _____

4)

 $= 1$ 



4. _____

5)

 $= 1$ 

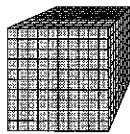
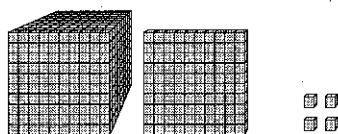
5. _____

6)

 $= 1$ 

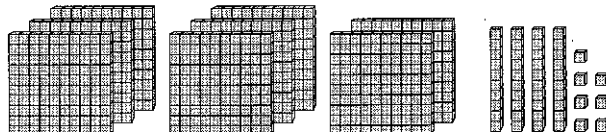
6. _____

7)

 $= 1$ 


7. _____

8)

 $= 1$ 



8. _____

9)

 $= 1$ 

9. _____

10)

 $= 1$ 

10. _____